

Please write clearly in block capitals.

Centre number

--	--	--	--	--

Candidate number

--	--	--	--

Surname

Forename(s)

Candidate signature

GCSE MATHEMATICS

F


Foundation Tier Paper 2 Calculator

Thursday 7 November 2019 Morning Time allowed: 1 hour 30 minutes

Materials

For this paper you must have:

- a calculator
- mathematical instruments.



Instructions

- Use black ink or black ball-point pen. Draw diagrams in pencil.
- Fill in the boxes at the top of this page.
- Answer **all** questions.
- You must answer the questions in the spaces provided. Do not write outside the box around each page or on blank pages.
- Do all rough work in this book. Cross through any work you do not want to be marked.

Information

- The marks for questions are shown in brackets.
- The maximum mark for this paper is 80.
- You may ask for more answer paper, graph paper and tracing paper. These must be tagged securely to this answer book.

For Examiner's Use	
Pages	Mark
2–3	
4–5	
6–7	
8–9	
10–11	
12–13	
14–15	
16–17	
18–19	
20–21	
22–23	
24–25	
TOTAL	

Advice

In all calculations, show clearly how you work out your answer.



Answer **all** questions in the spaces provided

- 1** Simplify $8a - 3a + a$
Circle your answer.

[1 mark]

$4a$

$6a$

$5 + a$

$8a - 3a^2$

- 2** Which of these numbers is three less than a square number?
Circle your answer.

[1 mark]

5

19

22

34

- 3** Circle the length of time between 1.50 pm and 3.35 pm

[1 mark]

1 h 45 min

2 h 15 min

2 h 25 min

3 h 5 min

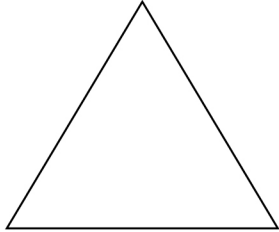


4

Circle the letter of the shape that has rotational symmetry of order 2

[1 mark]


P




Q



R



S



Turn over for the next question

4

Turn over ►



0 3

5 Here are eight numbers.

4 10 9 3 4 12 5 14

5 (a) Work out the range.

[1 mark]

Answer _____

5 (b) Work out the median.

[2 marks]

Answer _____



6 A shop has this offer.

£5 reduction if you spend more than £100
or
£10 reduction if you spend more than £150
or
£20 reduction if you spend more than £200

At the shop, dresses cost £42 each.

Amira buys 3 dresses.

Bobbi buys 5 dresses.

How much **more** than Amira does Bobbi pay?

[3 marks]

Answer £ _____

Turn over for the next question



7 (a) Solve $x + 17 = 12$

[1 mark]

$$x = \underline{\hspace{10em}}$$

7 (b) Solve $\frac{w}{4} = 12$

[1 mark]

$$w = \underline{\hspace{10em}}$$

7 (c) Simplify fully $\frac{9m}{12m}$

[2 marks]

Answer $\underline{\hspace{10em}}$



- 8 The cost of a taxi journey is
£3 plus £2 per mile.
Circle the cost of a journey of 6 miles.

[1 mark]

£5

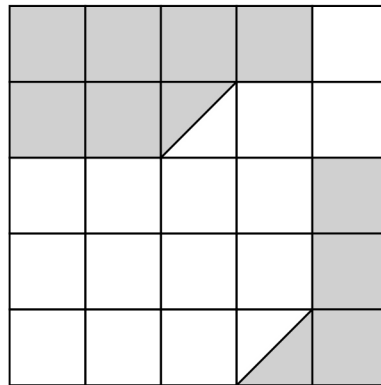
£12

£15

£30

- 9 What percentage of this shape is shaded?

[2 marks]



Answer _____ %







10

A group of students were asked to name their favourite burger.

The pictogram shows the results.

The key is missing.

Chicken	
Beef	
Turkey	
Veggie	

40 students said Veggie.

How many students said Chicken?

[3 marks]

Answer _____



11 $c = 250 - 16^2$

$$d = \frac{18 \times 14}{-28}$$

Work out the value of $c \times d$

[2 marks]

Answer _____

12 When a spinner is spun, it shows
Blue (B) or Green (G) or Red (R) or White (W).

When a coin is tossed, it shows
Heads (H) or Tails (T).

The spinner is spun and the coin is tossed.

Complete this list of possible outcomes.

[2 marks]

B H

7

Turn over ►



13

A quadrilateral $PQRS$ has

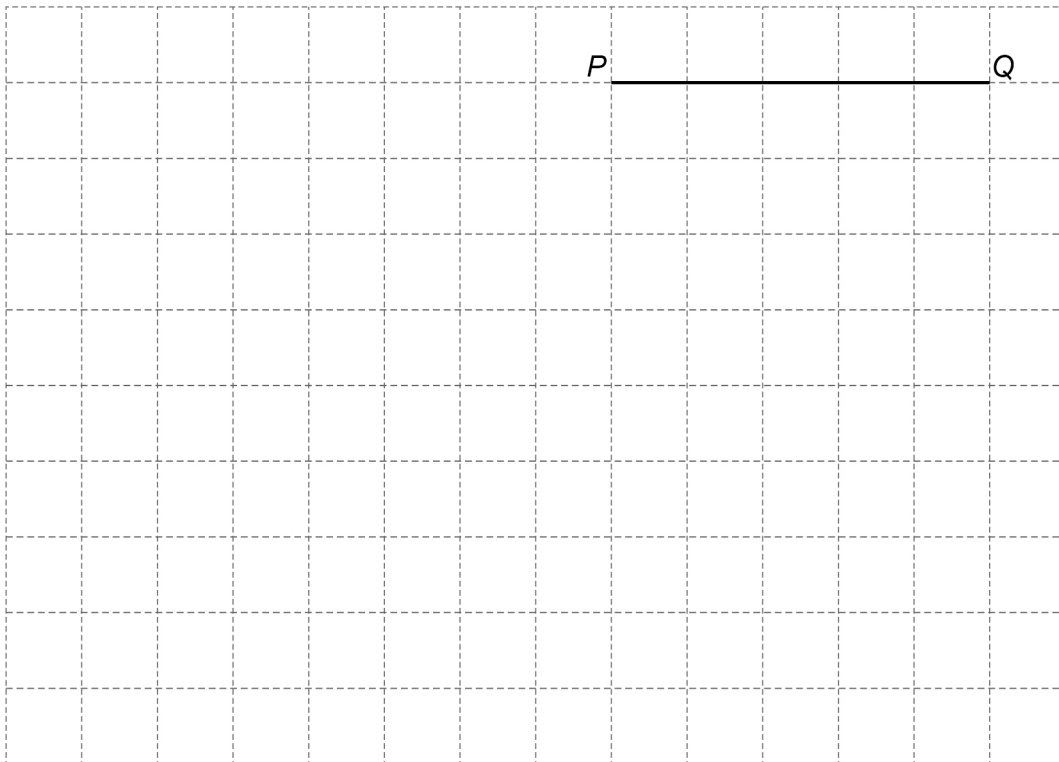
$$PQ = 5 \text{ cm}$$

 QR perpendicular to PQ

$$QR = 7 \text{ cm}$$

$$\text{angle } QPS = 135^\circ$$

$$PS = 8.5 \text{ cm}$$

On the grid, draw the quadrilateral $PQRS$. PQ has been drawn for you.**[4 marks]**

14 Circle the solid that has six vertices.

[1 mark]

cone

cuboid

triangular prism

square-based pyramid

15 Which of these fractions is closer in value to 1?

$$\frac{3}{4}$$

$$\frac{13}{10}$$

You **must** show your working.

[2 marks]

Answer _____

Turn over for the next question

7

Turn over ►



16 Three teams, A, B and C, play in a competition.

games won by A : games won by B = 2 : 1

games won by B : games won by C = 3 : 1

Team B has won 6 games.

In total, how many games have the three teams won?

[3 marks]

Answer _____



17

Match each expression in Column P with the equivalent expression in Column Q.

One has been done for you.

[3 marks]**Column P****Column Q**

$$a^2 \times a$$

$$6a$$

$$2a \times 3$$

$$5a$$

$$12a^2 \div 2$$

$$a^3$$

$$10 \times \frac{1}{2}a^2$$

$$5a^2$$

$$6a^2$$

Turn over for the next question

6

Turn over ►



18 A drink is made by adding water to juice.

Instructions
Add an amount of water that is between 2 times and 3 times the amount of juice

Rana has 120 ml of juice.
She adds some water.
She has now made 450 ml of the drink.

Has Rana followed the instructions?

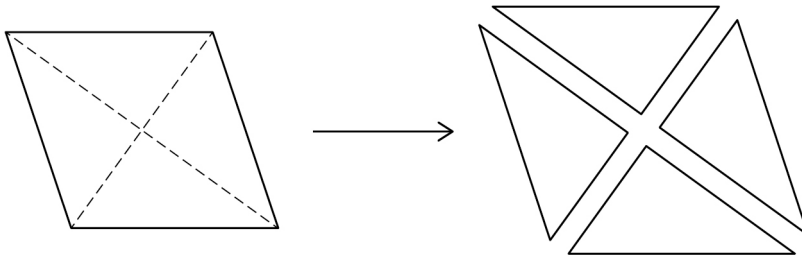
You **must** show your working.

[3 marks]



19

A rhombus is cut along the diagonals to make four triangles.



Not drawn
accurately

Which **three** statements are correct for any rhombus?

Tick **three** boxes.

[2 marks]

All four triangles are right-angled

All four triangles are isosceles

All four triangles are congruent

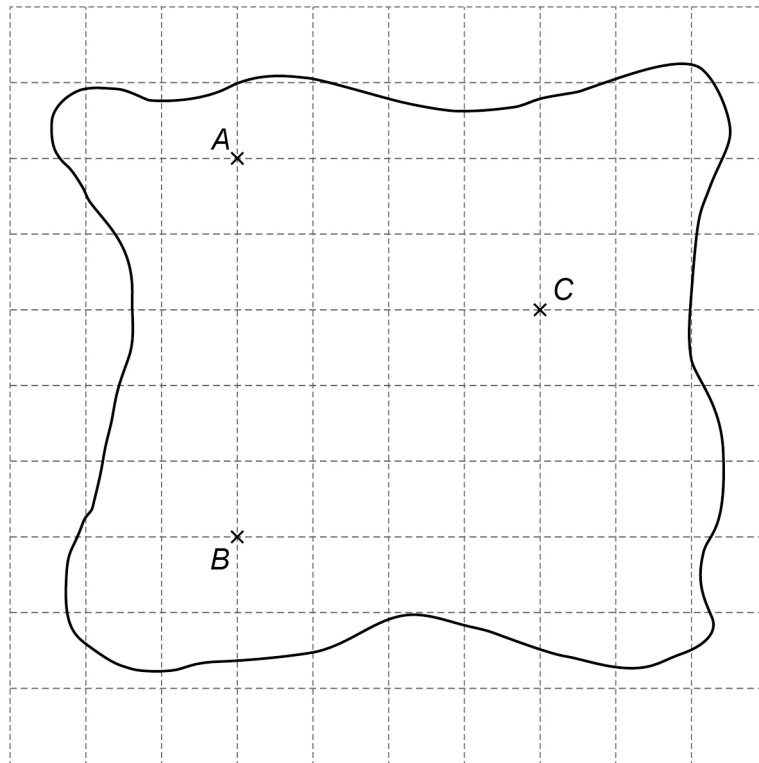
Area of rhombus = $4 \times$ area of one triangle

Perimeter of rhombus = $4 \times$ perimeter of one triangle

Turn over for the next question



- 20** A map of an island is shown on a centimetre grid.
A, B and C are houses.



- 20 (a)** The actual distance between A and B is 1500 metres.
Show that the scale on the map is 1 : 30 000

[2 marks]



- 20 (b)** Work out the actual distance between A and C.
Give your answer in kilometres.

[4 marks]

Answer _____ km

- 21** a and b are both prime numbers.
They are each less than 20
Give an example where $a + b$ is odd but **not** prime.

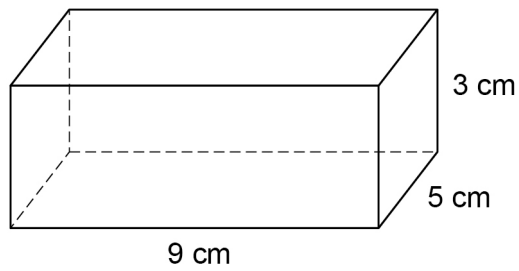
[2 marks]

$a =$ _____ $b =$ _____



22

Here is a cuboid.

The two **largest** faces are blue.

The other four faces are green.

Is the total blue area greater than the total green area?

You **must** show your working.**[3 marks]**



- 23** The result of a game is Win, Lose or Draw.
After 80 games
relative frequency of the result Win is 0.4
relative frequency of the result Lose is 0.25

How many of the games had the result Draw?

[3 marks]

Answer _____

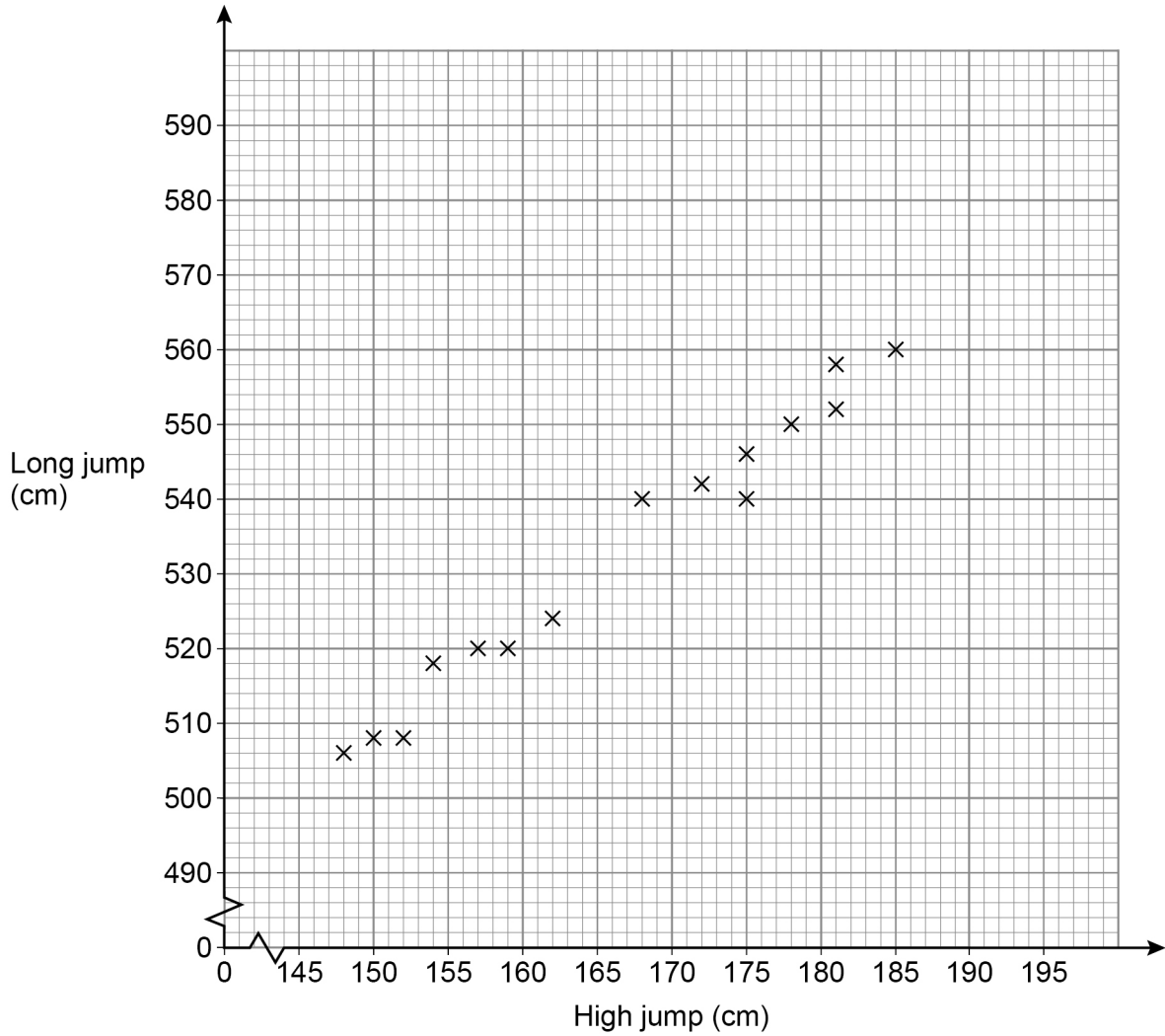
- 24** Work out the lowest common multiple (LCM) of 120 and 144

[2 marks]

Answer _____



25 The scatter graph shows the best high jump and the best long jump for 15 boys.



25 (a) Write down the type of correlation shown.

[1 mark]

Answer _____



25 (b) Liam has a best high jump of 166 cm

Use a line of best fit to estimate his best long jump.

[2 marks]

Answer _____ cm

25 (c) Another boy has a best high jump of 195 cm

Give a reason why you should **not** use a line of best fit to estimate his best long jump.

[1 mark]

Turn over for the next question



- 26** A car journey is in two stages.
Stage 1 The car travels 110 miles in 2 hours.
Stage 2 The car travels 44 miles at the same average speed as Stage 1
Work out the time for Stage 2
Give your answer in minutes.
- [3 marks]**

Answer _____ minutes

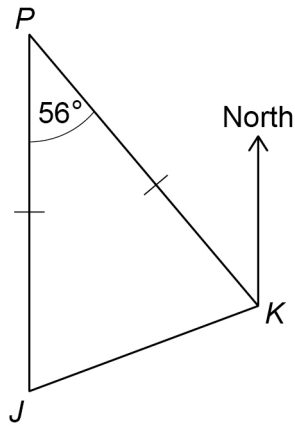
- 27** Here is an identity.
$$a(3x - 10) \equiv 21x + 2b$$

Work out the values of a and b .
- [3 marks]**

$a =$ _____ $b =$ _____



28

J and *K* are ships.*P* is a port.*J* is due South of *P*.Angle $JPK = 56^\circ$ $JP = KP$ Not drawn
accuratelyWork out the bearing of *J* from *K*.**[3 marks]**

Answer _____ °

Turn over for the next question**Turn over ►**

29

The 5th term of a linear sequence is 17

The 6th term of the sequence is 21

Work out the 100th term of the sequence.

[3 marks]

Answer _____

30

$$\mathbf{a} = \begin{pmatrix} 2 \\ 7 \end{pmatrix} \quad \mathbf{b} = \begin{pmatrix} 5 \\ -2 \end{pmatrix}$$

Work out $3\mathbf{a} + \mathbf{b}$ **[2 marks]**

Answer

 $\left(\quad \right)$ 

31

The value of a house is £120 000

The value is expected to increase by 5% each year.

Work out the expected value after 4 years.

Give your answer to 2 significant figures.

You **must** show your working.

[4 marks]

Answer £ _____

END OF QUESTIONS

There are no questions printed on this page

*Do not write
outside the
box*

**DO NOT WRITE ON THIS PAGE
ANSWER IN THE SPACES PROVIDED**



There are no questions printed on this page

*Do not write
outside the
box*

**DO NOT WRITE ON THIS PAGE
ANSWER IN THE SPACES PROVIDED**



There are no questions printed on this page

*Do not write
outside the
box*

**DO NOT WRITE ON THIS PAGE
ANSWER IN THE SPACES PROVIDED**

Copyright information

For confidentiality purposes, from the November 2015 examination series, acknowledgements of third-party copyright material are published in a separate booklet rather than including them on the examination paper or support materials. This booklet is published after each examination series and is available for free download from www.aqa.org.uk after the live examination series.

Permission to reproduce all copyright material has been applied for. In some cases, efforts to contact copyright-holders may have been unsuccessful and AQA will be happy to rectify any omissions of acknowledgements. If you have any queries please contact the Copyright Team, AQA, Stag Hill House, Guildford, GU2 7XJ.

Copyright © 2019 AQA and its licensors. All rights reserved.



2 8



1 9 B G 8 3 0 0 / 2 F

IB/M/Nov19/8300/2F