



Please write clearly in block capitals.

Centre number

--	--	--	--	--

Candidate number

--	--	--	--

Surname

Forename(s)

Candidate signature

A-level MATHEMATICS

Paper 1

Wednesday 5 June 2019

Morning

Time allowed: 2 hours

Materials

- You must have the AQA Formulae for A-level Mathematics booklet.
- You should have a graphical or scientific calculator that meets the requirements of the specification.

Instructions

- Use black ink or black ball-point pen. Pencil should only be used for drawing.
- Fill in the boxes at the top of this page.
- Answer **all** questions.
- You must answer each question in the space provided for that question. If you require extra space, use an AQA supplementary answer book; do **not** use the space provided for a different question.
- Show all necessary working; otherwise marks for method may be lost.
- Do all rough work in this book. Cross through any work that you do not want to be marked.

Information

- The marks for questions are shown in brackets.
- The maximum mark for this paper is 100.

Advice

- Unless stated otherwise, you may quote formulae, without proof, from the booklet.
- You do not necessarily need to use all the space provided.

For Examiner's Use	
Question	Mark
1	
2	
3	
4	
5	
6	
7	
8	
9	
10	
11	
12	
13	
14	
15	
16	
TOTAL	



J U N 1 9 7 3 5 7 1 0 1

Answer **all** questions in the spaces provided.

- 1** Given that $a > 0$, determine which of these expressions is **not** equivalent to the others.

Circle your answer.

[1 mark]

$$-2 \log_{10} \left(\frac{1}{a} \right) \quad 2 \log_{10} (a) \quad \log_{10} (a^2) \quad -4 \log_{10} (\sqrt{a})$$

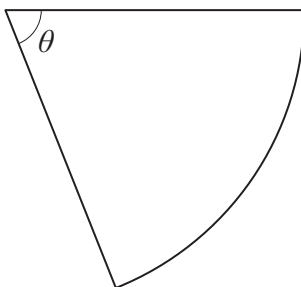
- 2** Given $y = e^{kx}$, where k is a constant, find $\frac{dy}{dx}$

Circle your answer.

[1 mark]

$$\frac{dy}{dx} = e^{kx} \quad \frac{dy}{dx} = ke^{kx} \quad \frac{dy}{dx} = kxe^{kx-1} \quad \frac{dy}{dx} = \frac{e^{kx}}{k}$$

- 3** The diagram below shows a sector of a circle.



The radius of the circle is 4 cm and $\theta = 0.8$ radians.

Find the area of the sector.

Circle your answer.

[1 mark]

$$1.28 \text{ cm}^2 \quad 3.2 \text{ cm}^2 \quad 6.4 \text{ cm}^2 \quad 12.8 \text{ cm}^2$$



Do not write outside the box

5 An arithmetic sequence has first term a and common difference d .
The sum of the first 16 terms of the sequence is 260

5 (a) Show that $4a + 30d = 65$

[2 marks]

5 (b) Given that the sum of the first 60 terms is 315, find the sum of the first 41 terms.

[3 marks]



*Do not write
outside the
box*

5 (c) S_n is the sum of the first n terms of the sequence.

Explain why the value you found in part **(b)** is the maximum value of S_n

[2 marks]

Turn over for the next question

Turn over ►



6 The function f is defined by

$$f(x) = \frac{1}{2}(x^2 + 1), x \geq 0$$

6 (a) Find the range of f .

[1 mark]

6 (b) (i) Find $f^{-1}(x)$

[3 marks]

6 (b) (ii) State the range of $f^{-1}(x)$

[1 mark]



Do not write outside the box

6 (c) State the transformation which maps the graph of $y = f(x)$ onto the graph of $y = f^{-1}(x)$

[1 mark]

6 (d) Find the coordinates of the point of intersection of the graphs of $y = f(x)$ and $y = f^{-1}(x)$

[2 marks]

Turn over for the next question

Turn over ►

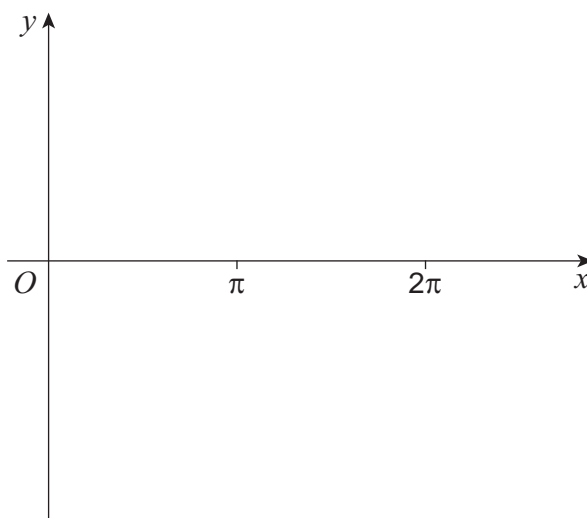


- 7 (a)** By sketching the graphs of $y = \frac{1}{x}$ and $y = \sec 2x$ on the axes below, show that the equation

$$\frac{1}{x} = \sec 2x$$

has exactly one solution for $x > 0$

[3 marks]



- 7 (b)** By considering a suitable change of sign, show that the solution to the equation lies between 0.4 and 0.6

[2 marks]

- 7 (c)** Show that the equation can be rearranged to give

$$x = \frac{1}{2} \cos^{-1} x$$

[2 marks]



Do not write
outside the
box

7 (d) (i) Use the iterative formula

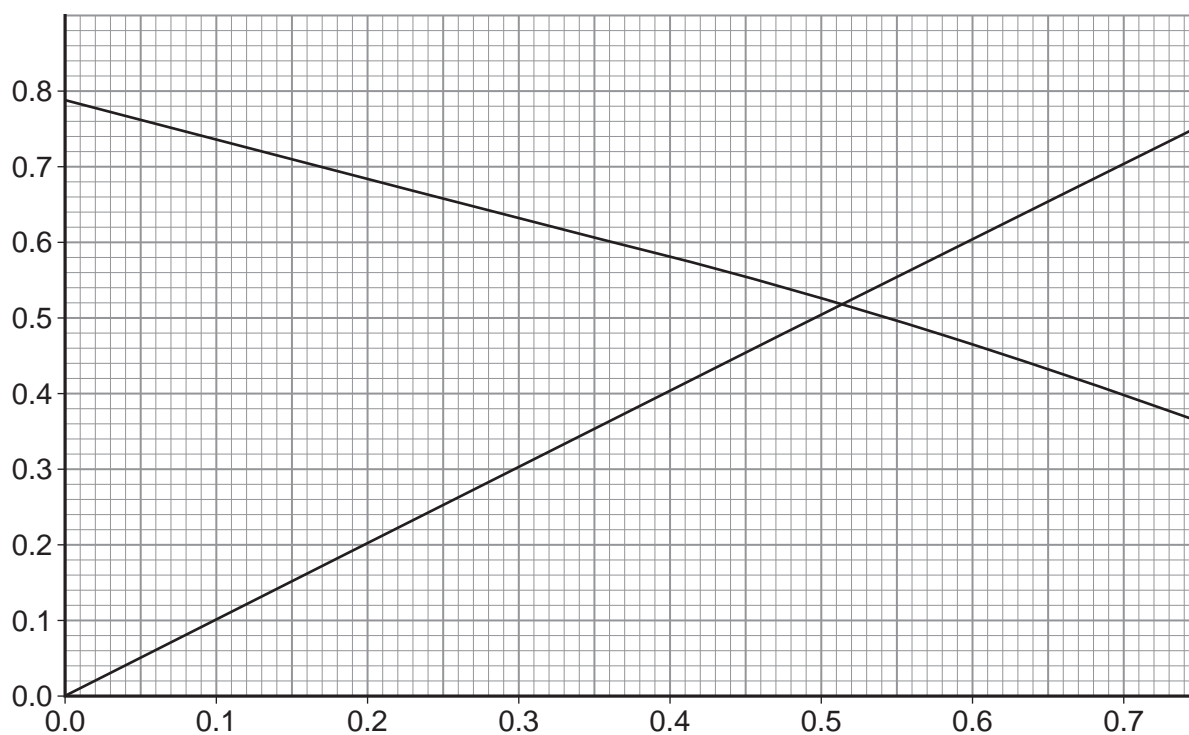
$$x_{n+1} = \frac{1}{2} \cos^{-1} x_n$$

with $x_1 = 0.4$, to find x_2 , x_3 and x_4 , giving your answers to four decimal places.

[2 marks]

7 (d) (ii) On the graph below, draw a cobweb or staircase diagram to show how convergence takes place, indicating the positions of x_2 , x_3 and x_4 .

[2 marks]



Turn over ►



Do not write
outside the
box

8 $P(n) = \sum_{k=0}^n k^3 - \sum_{k=0}^{n-1} k^3$ where n is a positive integer.

8 (a) Find $P(3)$ and $P(10)$

[2 marks]

8 (b) Solve the equation $P(n) = 1.25 \times 10^8$

[2 marks]



*Do not write
outside the
box*

9

Prove that the sum of a rational number and an irrational number is always irrational.
[5 marks]

Turn over for the next question

Turn over ▶



Turn over for the next question

*Do not write
outside the
box*

**DO NOT WRITE ON THIS PAGE
ANSWER IN THE SPACES PROVIDED**

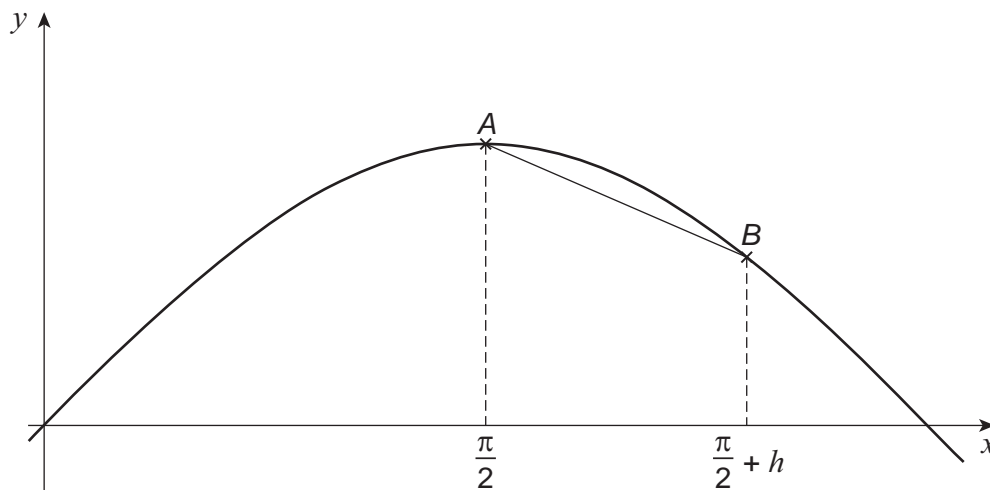
Turn over ►



11

Jodie is attempting to use differentiation from first principles to prove that the gradient of $y = \sin x$ is zero when $x = \frac{\pi}{2}$

Jodie's teacher tells her that she has made mistakes starting in Step 4 of her working. Her working is shown below.



Step 1 Gradient of chord $AB = \frac{\sin\left(\frac{\pi}{2} + h\right) - \sin\left(\frac{\pi}{2}\right)}{h}$

Step 2 $= \frac{\sin\left(\frac{\pi}{2}\right) \cos(h) + \cos\left(\frac{\pi}{2}\right) \sin(h) - \sin\left(\frac{\pi}{2}\right)}{h}$

Step 3 $= \sin\left(\frac{\pi}{2}\right) \left(\frac{\cos(h) - 1}{h}\right) + \cos\left(\frac{\pi}{2}\right) \frac{\sin(h)}{h}$

Step 4 For gradient of curve at A ,

let $h = 0$ then

$$\frac{\cos(h) - 1}{h} = 0 \text{ and } \frac{\sin(h)}{h} = 0$$

Step 5 Hence the gradient of the curve at A is given by

$$\sin\left(\frac{\pi}{2}\right) \times 0 + \cos\left(\frac{\pi}{2}\right) \times 0 = 0$$

Do not write
outside the
box



Complete Steps 4 and 5 of Jodie's working below, to correct her proof.

[4 marks]

Step 4 For gradient of curve at A ,

Step 5 Hence the gradient of the curve at A is given by

Turn over for the next question

*Do not write
outside the
box*

Turn over ►



12 (a) Show that the equation

$$2 \cot^2 x + 2 \operatorname{cosec}^2 x = 1 + 4 \operatorname{cosec} x$$

can be written in the form

$$a \operatorname{cosec}^2 x + b \operatorname{cosec} x + c = 0$$

[2 marks]

*Do not write
outside the
box*



12 (b) Hence, given x is obtuse and

$$2 \cot^2 x + 2 \operatorname{cosec}^2 x = 1 + 4 \operatorname{cosec} x$$

find the exact value of $\tan x$

Fully justify your answer.

[5 marks]

Turn over for the next question

Turn over ►



Turn over for the next question

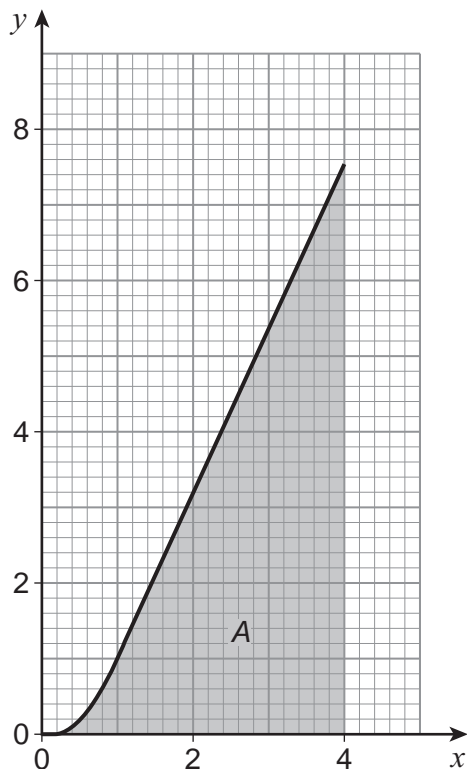
*Do not write
outside the
box*

**DO NOT WRITE ON THIS PAGE
ANSWER IN THE SPACES PROVIDED**

Turn over ►



- 14 The graph of $y = \frac{2x^3}{x^2 + 1}$ is shown for $0 \leq x \leq 4$



Caroline is attempting to approximate the shaded area, A , under the curve using the trapezium rule by splitting the area into n trapezia.

- 14 (a) When $n = 4$

- 14 (a) (i) State the number of ordinates that Caroline uses.

[1 mark]

- 14 (a) (ii) Calculate the area that Caroline should obtain using this method.

Give your answer correct to two decimal places.

[3 marks]



Do not write
outside the
box

14 (b) Show that the exact area of A is

$$16 - \ln 17$$

Fully justify your answer.

[5 marks]

Question 14 continues on the next page

Turn over ►



14 (c) Explain what would happen to Caroline's answer to part **(a)(ii)** as $n \rightarrow \infty$

[1 mark]

*Do not write
outside the
box*



Turn over for the next question

*Do not write
outside the
box*

**DO NOT WRITE ON THIS PAGE
ANSWER IN THE SPACES PROVIDED**

Turn over ►



2 3

- 15 (a)** At time t hours **after a high tide**, the height, h metres, of the tide and the velocity, v knots, of the tidal flow can be modelled using the parametric equations

$$v = 4 - \left(\frac{2t}{3} - 2\right)^2$$

$$h = 3 - 2\sqrt[3]{t-3}$$

High tides and low tides occur alternately when the velocity of the tidal flow is zero.

A high tide occurs at 2 am.

- 15 (a) (i)** Use the model to find the height of this high tide.

[1 mark]

- 15 (a) (ii)** Find the time of the first **low** tide after 2 am.

[3 marks]

- 15 (a) (iii)** Find the height of this low tide.

[1 mark]



Do not write
outside the
box

15 (b) Use the model to find the height of the tide when it is flowing with maximum velocity. **[3 marks]**

15 (c) Comment on the validity of the model. **[2 marks]**

Turn over for the next question

Turn over ►



16 (a) $y = e^{-x}(\sin x + \cos x)$

Find $\frac{dy}{dx}$

Simplify your answer.

[3 marks]

16 (b) Hence, show that

$$\int e^{-x} \sin x \, dx = ae^{-x}(\sin x + \cos x) + c$$

where a is a rational number.

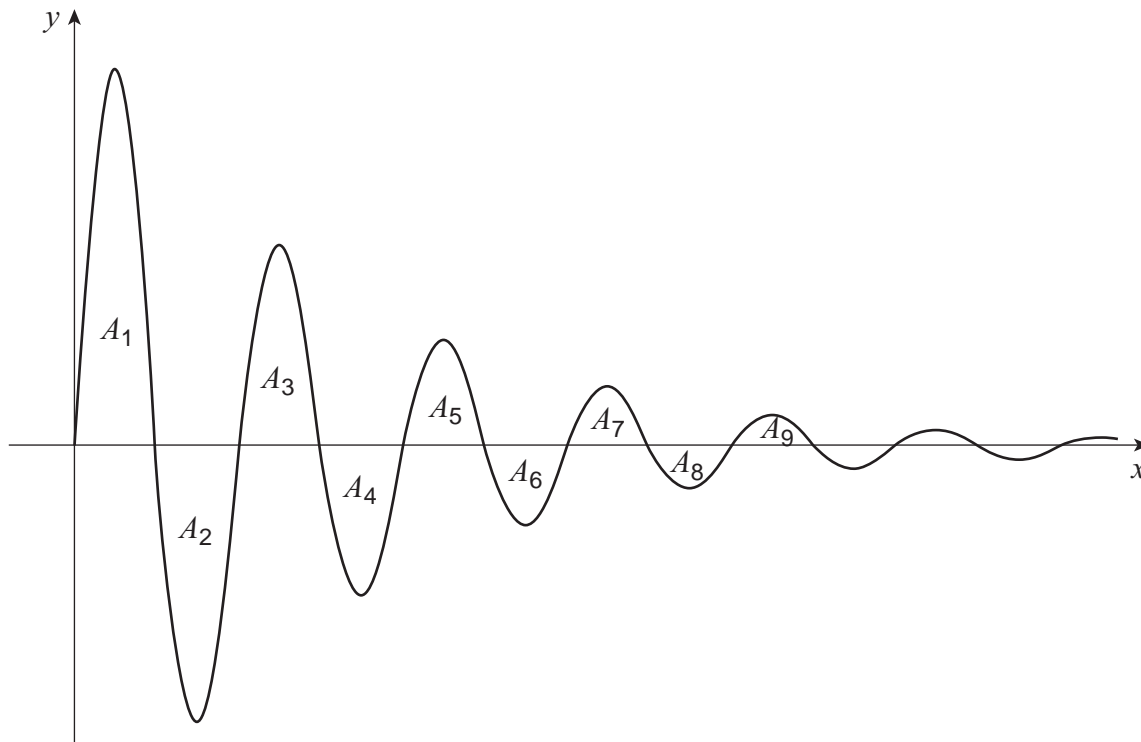
[2 marks]



Do not write
outside the
box

16 (c) A sketch of the graph of $y = e^{-x} \sin x$ for $x \geq 0$ is shown below.

The areas of the finite regions bounded by the curve and the x -axis are denoted by $A_1, A_2, \dots, A_n, \dots$



16 (c) (i) Find the exact value of the area A_1

[3 marks]

Question 16 continues on the next page

Turn over ►



16 (c) (ii) Show that

$$\frac{A_2}{A_1} = e^{-\pi}$$

[4 marks]

Do not write
outside the
box



16 (c) (iii) Given that

$$\frac{A_{n+1}}{A_n} = e^{-\pi}$$

show that the exact value of the total area enclosed between the curve and the x -axis is

$$\frac{1 + e^\pi}{2(e^\pi - 1)}$$

[4 marks]

Do not write
outside the
box

END OF QUESTIONS



There are no questions printed on this page

*Do not write
outside the
box*

**DO NOT WRITE ON THIS PAGE
ANSWER IN THE SPACES PROVIDED**



There are no questions printed on this page

*Do not write
outside the
box*

**DO NOT WRITE ON THIS PAGE
ANSWER IN THE SPACES PROVIDED**



There are no questions printed on this page

*Do not write
outside the
box*

**DO NOT WRITE ON THIS PAGE
ANSWER IN THE SPACES PROVIDED**

Copyright information

For confidentiality purposes, from the November 2015 examination series, acknowledgements of third-party copyright material are published in a separate booklet rather than including them on the examination paper or support materials. This booklet is published after each examination series and is available for free download from www.aqa.org.uk after the live examination series.

Permission to reproduce all copyright material has been applied for. In some cases, efforts to contact copyright-holders may have been unsuccessful and AQA will be happy to rectify any omissions of acknowledgements. If you have any queries please contact the Copyright Team, AQA, Stag Hill House, Guildford, GU2 7XJ.

Copyright © 2019 AQA and its licensors. All rights reserved.



3 2

Jun19/7357/1



1 9 6 A 7 3 5 7 / 1