

Please check the examination details below before entering your candidate information

Candidate surname					Other names								
<b>Pearson Edexcel</b>					Centre Number				Candidate Number				
<b>Level 3 GCE</b>													
Time 1 hour 45 minutes					Paper reference				<b>9CH0/01</b>				
<b>Chemistry</b>												▲ ▲	
<b>Advanced</b>													
<b>PAPER 1: Advanced Inorganic and Physical Chemistry</b>													
Candidates must have: <b>Scientific calculator</b>										Total Marks			
<b>Data Booklet</b>													
<b>Ruler</b>													

### Instructions

- Use **black** ink or **black** ball-point pen.
- **Fill in the boxes** at the top of this page with your name, centre number and candidate number.
- Answer **all** questions.
- Answer the questions in the spaces provided  
– *there may be more space than you need.*
- Show all your working in calculations and include units where appropriate.

### Information

- The total mark for this paper is 90.
- The marks for **each** question are shown in brackets  
– *use this as a guide as to how much time to spend on each question.*
- For the question marked with an **asterisk** (\*), marks will be awarded for your ability to structure your answer logically showing the points that you make are related or follow on from each other where appropriate.
- A Periodic Table is printed on the back cover of this paper.

### Advice

- Read each question carefully before you start to answer it.
- Check your answers if you have time at the end.
- Good luck with your examination.

Turn over ►

P65463A  
©2021 Pearson Education Ltd.  
1/1/1/1/



  
Pearson

Answer ALL questions.

Some questions must be answered with a cross .  
If you change your mind about an answer, put a line through the box   
and then mark your new answer with a cross .

1 This is a question about atoms, isotopes and ions.

(a) Which of the following pairs of ions is isoelectronic?

(1)

- A  $\text{N}^{3-}$  and  $\text{Cl}^-$
- B  $\text{O}^{2-}$  and  $\text{S}^{2-}$
- C  $\text{Na}^+$  and  $\text{K}^+$
- D  $\text{Na}^+$  and  $\text{Mg}^{2+}$

(b) Which is a correct definition of relative isotopic mass?

(1)

- A the weighted mean mass of an atom of an element relative to one twelfth of the mass of an atom of the isotope carbon-12
- B the mass of one atom of an isotope relative to one twelfth of the mass of an atom of the isotope carbon-12
- C the weighted mean mass of an atom of an element relative to 12g of the isotope carbon-12
- D the mass of one atom of an isotope relative to the mass of 12g of the isotope carbon-12

DO NOT WRITE IN THIS AREA

DO NOT WRITE IN THIS AREA

DO NOT WRITE IN THIS AREA



- (c) The percentage composition of the two bromine isotopes in a sample is given in the table.

Isotope	Relative isotopic mass	Percentage abundance
bromine-79	78.918	50.52
bromine-81	80.916	49.48

Calculate the relative atomic mass of bromine in this sample.  
Give your answer to two decimal places.

(2)

**(Total for Question 1 = 4 marks)**

DO NOT WRITE IN THIS AREA

DO NOT WRITE IN THIS AREA

DO NOT WRITE IN THIS AREA



2 Barium ions can be identified by their flame colour.

(a) Which of the following should be used for a flame test on barium carbonate? (1)

- A iron wire and water
- B iron wire and concentrated hydrochloric acid
- C nichrome wire and water
- D nichrome wire and concentrated hydrochloric acid

(b) What colour do barium ions give in a flame test? (1)

- A green
- B lilac
- C red
- D yellow

(c) A flame test was carried out on a mixture of barium chloride and magnesium chloride.

How does the presence of magnesium ions affect the appearance of the flame colour of barium ions? (1)

- A the colour is more intense
- B a bright white colour completely masks the barium colour
- C there is no change
- D the barium colour is decreased by the white magnesium flame colour

**(Total for Question 2 = 3 marks)**

DO NOT WRITE IN THIS AREA

DO NOT WRITE IN THIS AREA

DO NOT WRITE IN THIS AREA



3 This question is about catalytic converters.

(a) Catalytic converters contain metals such as platinum.

Describe the bonding in platinum.  
You may include a diagram in your answer.

(2)

.....

.....

.....

.....

.....

.....

(b) A catalytic converter decreases the emissions of gases, such as carbon monoxide and nitrogen monoxide, from an internal combustion engine.

Describe the stages in a catalytic converter that result in this decrease.  
No equations are required.

(3)

.....

.....

.....

.....

.....

.....

.....

.....

**(Total for Question 3 = 5 marks)**



4 Ionisation energies provide information about the number of electrons and the arrangement of the electrons in an atom of an element.

(a) A student's definition of first ionisation energy is shown.

First ionisation energy is the energy released when one mole of gaseous atoms loses one mole of electrons to form one mole of gaseous 1+ ions.

There is one incorrect word in the student's definition.

Identify the word, giving the reason why this word is incorrect.

(2)

.....

.....

.....

(b) Write an equation for the **second** ionisation energy of oxygen.  
Include state symbols.

(2)

DO NOT WRITE IN THIS AREA

DO NOT WRITE IN THIS AREA

DO NOT WRITE IN THIS AREA



(c) A sodium atom has 11 protons whereas a potassium atom has 19 protons.

Explain why the first ionisation energy of sodium is greater than that of potassium.

(3)

DO NOT WRITE IN THIS AREA

DO NOT WRITE IN THIS AREA

DO NOT WRITE IN THIS AREA



(d) The successive ionisation energies for magnesium are given in the table.

Electron number removed	1	2	3	4	5	6	7	8	9	10	11	12
Ionisation energy / $\text{kJ mol}^{-1}$	738	1451	7733	10541	13629	17995	21704	25657	31644	35463	169996	189371
Log (ionisation energy)	2.87	3.16	3.89	4.02	4.13		4.34	4.41	4.50	4.55	5.23	

(i) Complete the table.

(1)

(ii) Give a reason why the logarithm of the ionisation energy, rather than just the ionisation energy, is used to plot a graph.

(1)

(iii) Give a reason why the successive ionisation energies increase.

(1)






(iv) Plot the graph of  $\log(\text{ionisation energy})$  against electron number removed.

Join the individual points using straight lines.

(3)



(v) Identify on the graph, using a circle, the points that represent the removal of the electrons in the **outermost** energy level of magnesium.

(1)



(e) Estimate a value for the first ionisation energy of oxygen given the data in the table.

(1)

Element	First ionisation energy / $\text{kJ mol}^{-1}$
carbon	1086
nitrogen	1402
oxygen	.....

(Total for Question 4 = 15 marks)

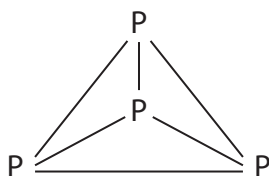


5 The halogens are elements in Group 7 of the Periodic Table.

(a) Chlorine compounds have many uses, including water treatment.

(i) Chlorine and phosphorus ( $P_4$ ) can react to form phosphorus(V) chloride.

The structure of a molecule of phosphorus is



Some mean bond enthalpy values are shown in the table.

Bond	Mean bond enthalpy / $\text{kJ mol}^{-1}$
P—P	+198
Cl—Cl	+243
P—Cl	+326

Calculate the enthalpy change for the reaction between chlorine and phosphorus to form phosphorus(V) chloride.



(3)



(ii) Give a reason why bond enthalpy values are always positive.

(1)

.....

.....

.....

(b) Sodium chlorate(I) is a bleaching agent.

(i) Sodium chlorate(I) can be made by the reaction of chlorine with sodium hydroxide.

Show, by using oxidation numbers, that this reaction is disproportionation.



(2)

.....

.....

(ii) A different bleaching agent can be made by the reaction of chlorine with sodium hydroxide under different conditions.

Balance this equation.



(1)

(iii) What conditions are required for the reaction in (b)(ii)?

(1)

- A** cold and dilute alkali
- B** cold and concentrated alkali
- C** hot alkali
- D** excess chlorine

DO NOT WRITE IN THIS AREA

DO NOT WRITE IN THIS AREA

DO NOT WRITE IN THIS AREA



- (c) The halogens can be identified by their colour in an organic solvent such as hexane or cyclohexane.

Which sequence of colours is correct for chlorine, bromine and iodine dissolved in an organic solvent?

(1)

	Chlorine	Bromine	Iodine
<input type="checkbox"/> A	orange	red-brown	black
<input type="checkbox"/> B	pale green	orange	black
<input type="checkbox"/> C	orange	red-brown	purple
<input type="checkbox"/> D	pale green	orange	purple

- (d) Halide ions can be identified by their reaction with silver nitrate.

- (i) Write the **ionic** equation for the reaction between aqueous solutions of sodium iodide and silver nitrate. Include state symbols.

(2)

- (ii) A solution containing 0.010 mol of a halide ion was reacted with excess silver nitrate and produced 1.88 g of precipitate.

Identify the halide ion.  
Justify your answer.

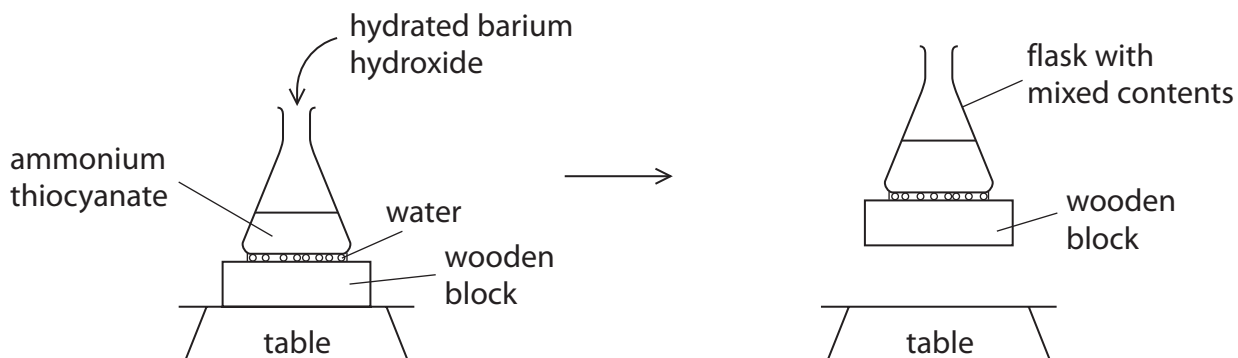
(2)

(Total for Question 5 = 13 marks)



6 This question is about entropy.

- (a) Some hydrated barium hydroxide is added to ammonium thiocyanate in a flask which is placed on a few drops of water on a wooden block. After the addition, the contents are stirred and then the flask can be lifted up with the wooden block attached, as shown.



The equation for the reaction is



- (i) Give **two** reasons why you would expect  $\Delta S_{\text{system}}^\ominus$  to be positive.

(2)

.....

.....

.....

.....

- (ii) Explain why the wooden block is lifted up by the flask.

(2)

.....

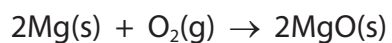
.....

.....

.....



(b) What is the standard molar entropy change,  $\Delta S_{\text{system}}^{\ominus}$ , in  $\text{JK}^{-1} \text{mol}^{-1}$ , for the reaction shown?



Substance	Standard molar entropy, $S^{\ominus} / \text{JK}^{-1} \text{mol}^{-1}$
Mg(s)	32.7
O <sub>2</sub> (g)	205.0
MgO(s)	26.9

(1)

- A +210.8
- B -210.8
- C +216.6
- D -216.6

(Total for Question 6 = 5 marks)

DO NOT WRITE IN THIS AREA

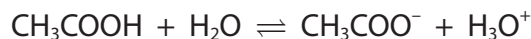
DO NOT WRITE IN THIS AREA

DO NOT WRITE IN THIS AREA



7 This question is about acids and buffer solutions.

(a) Ethanoic acid,  $\text{CH}_3\text{COOH}$ , is a monobasic acid.



Give a reason why only the proton from the carboxylic acid group, and not from the methyl group, is donated to a water molecule.

(1)

.....

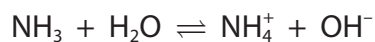
.....

.....

.....

.....

(b) The reaction of ammonia with water can be represented by



Which is the acid-conjugate base pair?

(1)

	Acid	Conjugate base
<input type="checkbox"/> A	$\text{NH}_3$	$\text{OH}^-$
<input type="checkbox"/> B	$\text{NH}_3$	$\text{NH}_4^+$
<input type="checkbox"/> C	$\text{H}_2\text{O}$	$\text{OH}^-$
<input type="checkbox"/> D	$\text{H}_2\text{O}$	$\text{NH}_4^+$

DO NOT WRITE IN THIS AREA

DO NOT WRITE IN THIS AREA

DO NOT WRITE IN THIS AREA





- (c) A commercial nitric acid solution,  $\text{HNO}_3(\text{aq})$ , has a concentration of  $15.9 \text{ mol dm}^{-3}$ .  
A  $15.0 \text{ cm}^3$  sample was made up to  $100 \text{ cm}^3$  by adding deionised water.

Calculate the pH of this diluted solution.

(2)

DO NOT WRITE IN THIS AREA

DO NOT WRITE IN THIS AREA

DO NOT WRITE IN THIS AREA



(d) Propanoic acid is a weak acid.

- (i) Calculate the pH of a  $0.100 \text{ mol dm}^{-3}$  solution of propanoic acid at 298 K. Give your answer to an appropriate number of significant figures.

$$[K_a = 1.35 \times 10^{-5} \text{ mol dm}^{-3} \text{ at } 298 \text{ K}]$$

(3)

- (ii) State **two** assumptions that you made in the calculation in d(i).

(2)

.....

.....

.....

.....

.....

.....

.....

DO NOT WRITE IN THIS AREA

DO NOT WRITE IN THIS AREA

DO NOT WRITE IN THIS AREA



- (e) A buffer solution was made using  $20.0 \text{ cm}^3$  of a butanoic acid solution, of concentration  $0.100 \text{ mol dm}^{-3}$  and  $30.0 \text{ cm}^3$  of sodium butanoate solution, of concentration  $0.305 \text{ mol dm}^{-3}$ .

$$[K_a = 1.52 \times 10^{-5} \text{ mol dm}^{-3} \text{ at } 298\text{K}]$$

- (i) Calculate the pH of this buffer solution at 298 K.

(4)

- (ii) Explain why the pH of the buffer solution hardly changes when a few drops of sodium hydroxide solution are added to it.  
Include an equation or equations in your answer.  
Use  $\text{C}_3\text{H}_7\text{COOH}$  as the formula for butanoic acid.

(2)

(Total for Question 7 = 15 marks)



**8** Transition metals form complex ions.

(a) Complex ions have a central metal ion surrounded by ligands.

(i) Give a reason why the ammonium ion cannot act as a ligand.

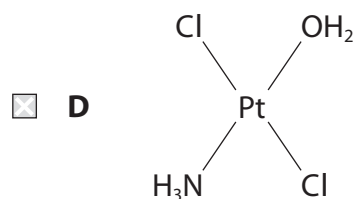
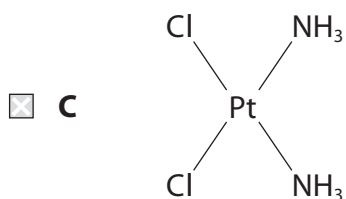
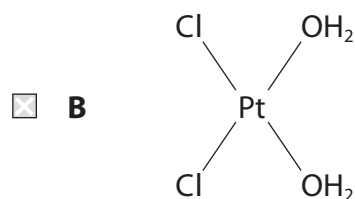
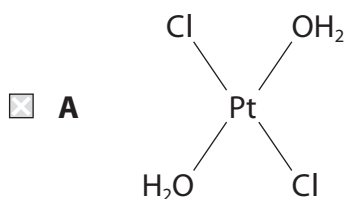
(1)

(ii) Explain why the complex ions  $[\text{Co}(\text{NH}_3)_6]^{2+}$  and  $[\text{Co}(\text{H}_2\text{O})_6]^{2+}$  are coloured and have different colours.

(4)

(b) Which of these complexes is used in the treatment of cancer?

(1)



DO NOT WRITE IN THIS AREA

DO NOT WRITE IN THIS AREA

DO NOT WRITE IN THIS AREA





- (d) Hydrated chromium(III) chloride,  $\text{CrCl}_3 \cdot 6\text{H}_2\text{O}$ , dissolves in water to form a number of different complex ions containing both chloride and water ligands.

The general formula of these complex ions is  $[\text{Cr}(\text{H}_2\text{O})_x(\text{Cl})_y]^{(3-y)+}$

In an experiment, 0.10 mol of a complex reacted with excess silver nitrate solution to produce 0.20 mol of silver chloride.

Chloride ions which are ligands within the complex do not react with silver nitrate.

Deduce the formula of this chromium(III) complex ion. Justify your answer.

(2)

(Total for Question 8 = 12 marks)



9 This question is about lattice energies.

(a) The table shows the theoretical and experimental lattice energy values of two compounds.

Compound	Theoretical lattice energy / $\text{kJ mol}^{-1}$	Experimental lattice energy / $\text{kJ mol}^{-1}$
magnesium iodide	-1944	-2327
barium iodide	-1831	-1877

(i) State what can be deduced by the close similarity of the lattice energy values for barium iodide.

(1)

(ii) Explain why there is a significant difference in the lattice energy values for magnesium iodide.

(4)

DO NOT WRITE IN THIS AREA

DO NOT WRITE IN THIS AREA

DO NOT WRITE IN THIS AREA



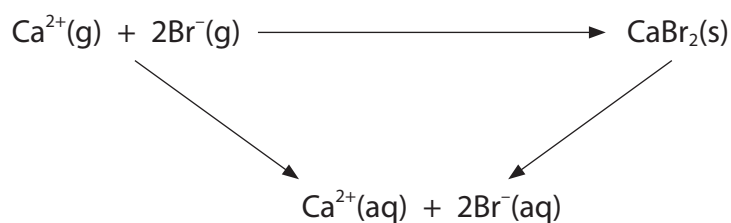




(ii) Calculate the lattice energy of copper(II) oxide.

(1)

(c) A different energy cycle can be used to calculate lattice energy.



Enthalpy change	Value / $\text{kJ mol}^{-1}$
enthalpy change of solution of $\text{CaBr}_2$	-73
enthalpy change of hydration of $\text{Ca}^{2+}$	-1577
enthalpy change of hydration of $\text{Br}^{-}$	-336

Calculate the lattice energy of calcium bromide.

(2)

(Total for Question 9 = 12 marks)



\*10 A student wrote:

Whether or not a reaction occurs depends only on the thermodynamic feasibility calculated using

$$\Delta G = \Delta H - T\Delta S_{\text{system}}$$

Discuss this statement.

Include reference to:

- changes in the values and signs of the terms in the equation for both endothermic and exothermic reactions
- circumstances where a reaction that is predicted to be thermodynamically feasible may not occur in practice.

(6)

DO NOT WRITE IN THIS AREA

DO NOT WRITE IN THIS AREA

DO NOT WRITE IN THIS AREA



DO NOT WRITE IN THIS AREA

DO NOT WRITE IN THIS AREA

DO NOT WRITE IN THIS AREA

(Total for Question 10 = 6 marks)

**TOTAL FOR PAPER = 90 MARKS**



